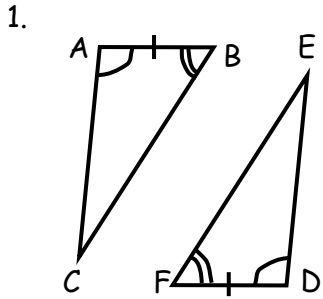


Congruent Triangles

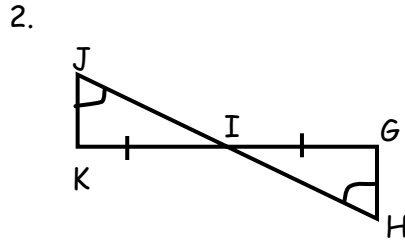
Name _____

Tell whether the SSS, ASA, AAS, SAS or HL postulates can be applied to prove the triangles congruent. Write a congruence statement.



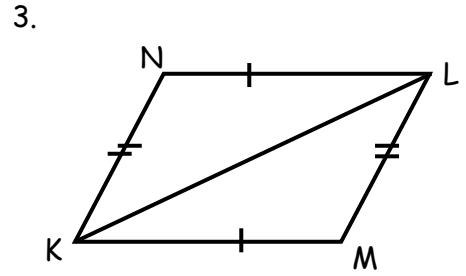
Reason: _____

$\triangle ABC \cong \triangle$ _____



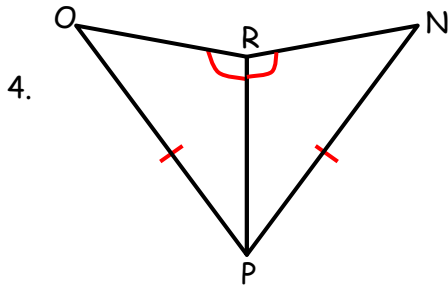
Reason: _____

$\triangle IJK \cong \triangle$ _____



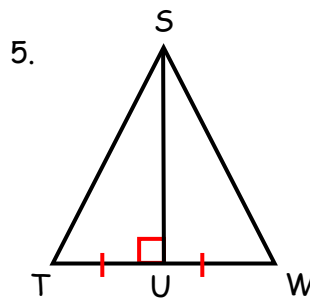
Reason: _____

$\triangle NLK \cong \triangle$ _____



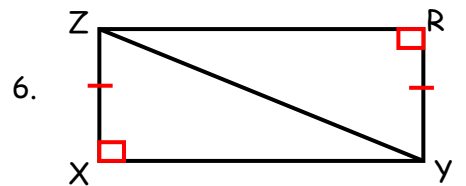
Reason: _____

$\triangle ORP \cong \triangle$ _____



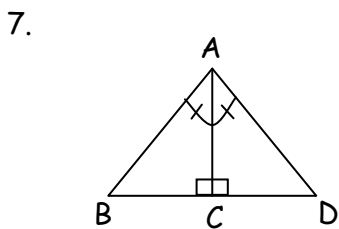
Reason: _____

$\triangle STU \cong \triangle$ _____



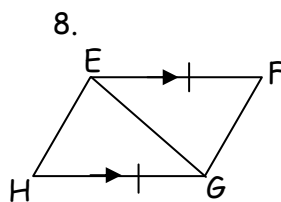
Reason: _____

$\triangle ZXY \cong \triangle$ _____



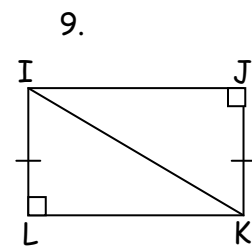
Reason: _____

$\triangle ABC \cong \triangle$ _____



Reason: _____

$\triangle EFG \cong \triangle$ _____



Reason: _____

$\triangle JKI \cong \triangle$ _____