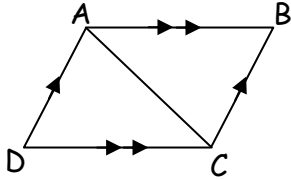


Congruent Triangles

Name _____

Determine how the triangles are congruent and write a congruency statement.

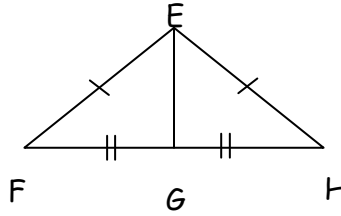
1.



Reason: _____

$\triangle ABC \cong \triangle$ _____

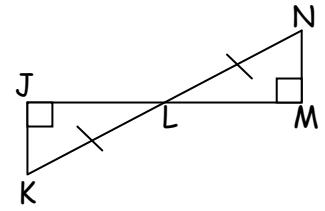
2.



Reason: _____

$\triangle EFG \cong \triangle$ _____

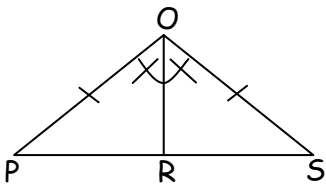
3.



Reason: _____

$\triangle JKL \cong \triangle$ _____

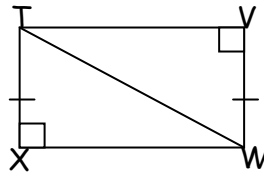
4.



Reason: _____

$\triangle POR \cong \triangle$ _____

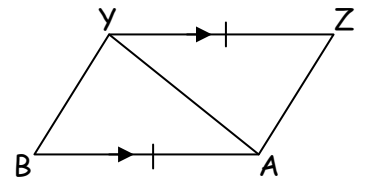
5.



Reason: _____

$\triangle TVW \cong \triangle$ _____

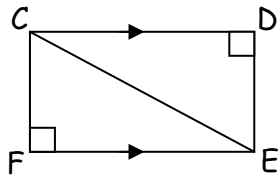
6.



Reason: _____

$\triangle AZY \cong \triangle$ _____

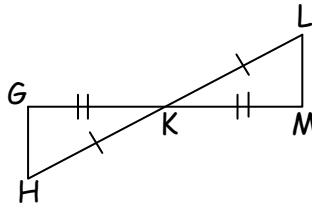
7.



Reason: _____

$\triangle CDE \cong \triangle$ _____

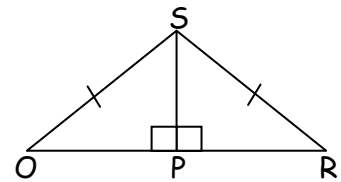
8.



Reason: _____

$\triangle LMK \cong \triangle$ _____

9.



Reason: _____

$\triangle OSP \cong \triangle$ _____